


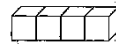


① □ に こたえを かきましょう。

(1)



$$5 + 4 = \square$$


(2)

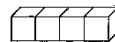

$$4 + 3 = \square$$


② □ に こたえを かきましょう。

(1)

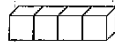
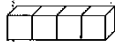
$$3 + 5 = \square$$


(2)

$$2 + 4 = \square$$


③ □ に こたえを かきましょう。

(1)

$$4 + 4 = \square$$


(2)

$$5 + 2 = \square$$
