
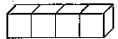




① □ に こたえを かきましょう。

(1)



$$4 - 2 = \square$$


(2)



$$3 - 1 = \square$$


② □ に こたえを かきましょう。

(1)



$$3 - 2 = \square$$


(2)

$$5 - 3 = \square$$


③ □ に こたえを かきましょう。

(1)

$$5 - 2 = \square$$


(2)

$$4 - 1 = \square$$
