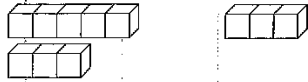


① □に こたえを かきましょう。

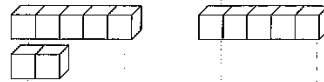
(1)

$8 - 3 = \square$



(2)

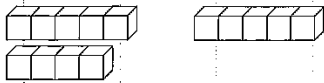
$7 - 5 = \square$



② □に こたえを かきましょう。

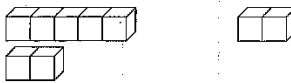
(1)

$9 - 5 = \square$



(2)

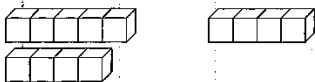
$7 - 2 = \square$



③ □に こたえを かきましょう。

(1)

$9 - 4 = \square$



(2)

$8 - 5 = \square$

