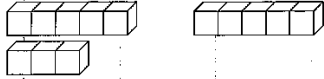


① □に こたえを かきましょう。

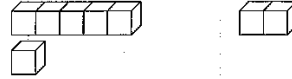
(1)

$$8 - 5 = \square$$



(2)

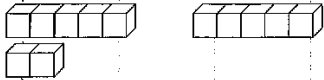
$$6 - 2 = \square$$



② □に こたえを かきましょう。

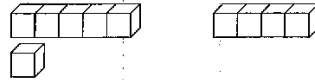
(1)

$$7 - 5 = \square$$



(2)

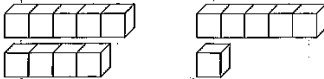
$$6 - 4 = \square$$



③ □に こたえを かきましょう。

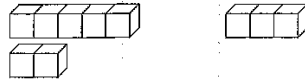
(1)

$$9 - 6 = \square$$



(2)

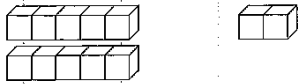
$$7 - 3 = \square$$



① □ に こたえを かきましょう。

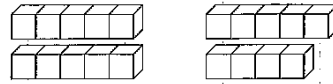
(1)

$10 - 2 = \square$



(2)

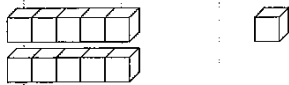
$10 - 9 = \square$



② □ に こたえを かきましょう。

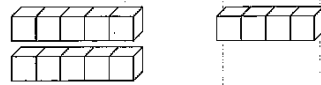
(1)

$10 - 1 = \square$



(2)

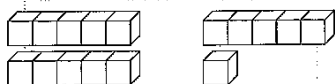
$10 - 4 = \square$



③ □ に こたえを かきましょう。

(1)

$10 - 6 = \square$



(2)

$10 - 8 = \square$

